


Area of Squares and Rectangles


Find the area of the given rectangle.



- 25 square inches 21 square inches
 18 square inches 30 square inches




- 25 square inches 21 square inches
 18 square inches 30 square inches



- 32 square inches 20 square inches
 15 square inches 35 square inches

4.

4 in.



2 in.

- 10 square inches 8 square inches
 12 square inches 14 square inches

5.

5 in.



3 in.

- 20 square inches 15 square inches
 16 square inches 14 square inches

6.

9 in.



5 in.

- 40 square inches 35 square inches
 45 square inches 50 square inches

7.

7 in.




6 in.

- 40 square inches 35 square inches
 42 square inches 50 square inches

8.

11 in.



9 in.

- 99 square inches 110 square inches
 100 square inches 95 square inches

9.

12 in.



8 in.

- 99 square inches 96 square inches
 100 square inches 95 square inches

10.

12 in.



10 in.

- 120 square inches 110 square inches
 100 square inches 95 square inches

Find the area of the given square.

11.

5 in.




5 in.

- 25 square inches 30 square inches
 40 square inches 20 square inches

12.

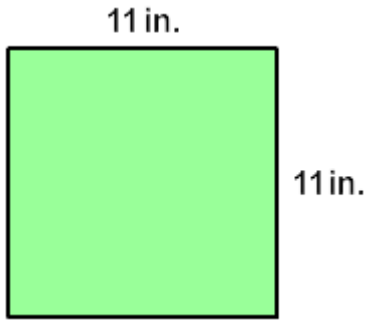
8 in.



8 in.

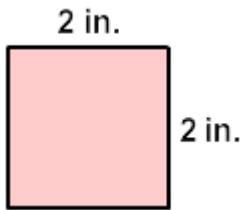
- 55 square inches 68 square inches
 64 square inches 61 square inches

13.



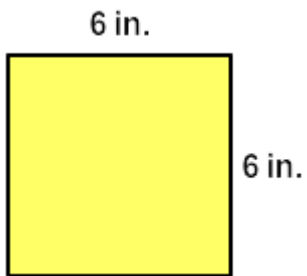
- 185 square inches 131 square inches
 140 square inches 121 square inches

14.



- 2 square inches 12 square inches
 4 square inches 8 square inches

15.



- 32 square inches 30 square inches
 36 square inches 33 square inches