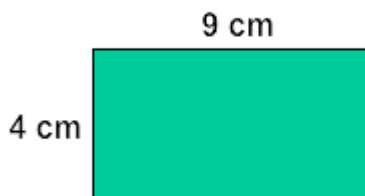


Perimeter of Squares and Rectangles

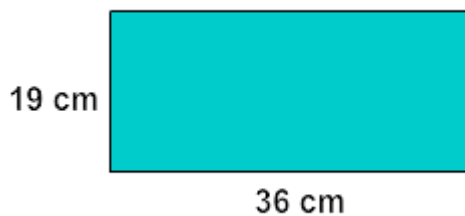
What is the perimeter of the given shape?

1.



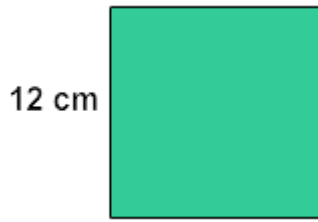
- 52 centimeters
- 13 centimeters
- 39 centimeters
- 26 centimeters

2.




- 72 centimeters
- 190.36 centimeters
- 306 centimeters
- 110 centimeters

3.



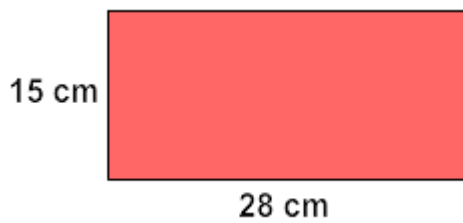
- 48 centimeters
- 24 centimeters
- 36 centimeters
- 60 centimeters

4.



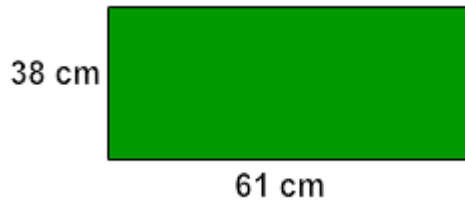
- 92 centimeters
- 104 centimeters
- 126 centimeters
- 88 centimeters

5.



centimeters

6.




centimeters

7.




inches

8.



centimeters

9.



inches

10.



inches

A rectangular window has a length of 7 centimeters and a width of 4 centimeters. Find the perimeter of the rectangular window.

11. 11 centimeters
 22 centimeters
 19 centimeters
 28 centimeters

If the perimeter of a square piece of plywood is 140 inches, what is the length of each side?

12. 35 inches
 70 inches
 45 inches
 100 inches

A rectangular rug has a length of 21 centimeters and a width of 6 centimeters. Find the perimeter of the rectangular rug.

13. 27 centimeters
 42 centimeters
 54 centimeters
 12 centimeters

Find the perimeter of a square yard with each side measuring 11 inches.

14. 44 inches
 22 inches
 68 inches
 56 inches

Find the perimeter of a square envelope with each side measuring 5 inches.

15. 20 inches
 28 inches
 10 inches
 25 inches