




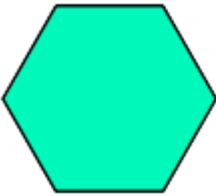

Classify Quadrilaterals

Identify the quadrilateral.




1.



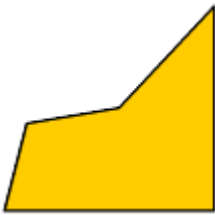

2.



3.



4.



Is the given shape a rhombus?

5.




Yes



No

Is the given shape a square?

6.




Yes

No

Is the given shape a rhombus?

7.

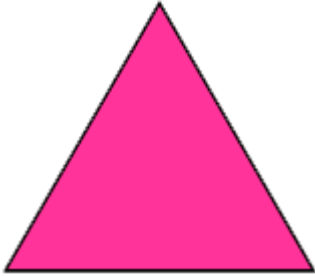


Yes

No

Is the given shape a trapezoid?

8.



Yes

No

9. Which of the following names can be used to describe the given shape?



Rectangle

Parallelogram

Quadrilateral


Trapezoid

10.



- Quadrilateral
- Rhombus
- Parallelogram
- Square

11.



- Trapezoid
- Parallelogram
- Quadrilateral
- Kite




12.



- Quadrilateral
- Parallelogram
- Kite
- Trapezoid




13. Which of the following figures satisfies all the given conditions?

polygon, four sides, opposite sides are parallel, opposite sides are equal



14. Which of the following figures satisfies the given conditions?

polyagon, four sides, opposite angles are equal, opposite sides are equal



15. Which of the following figures satisfies all the given conditions?

polygon, four sides, all sides equal, four right angles

